

(This shows my own thinking.)

SUNSHINE MATH - 1  
Venus, XV

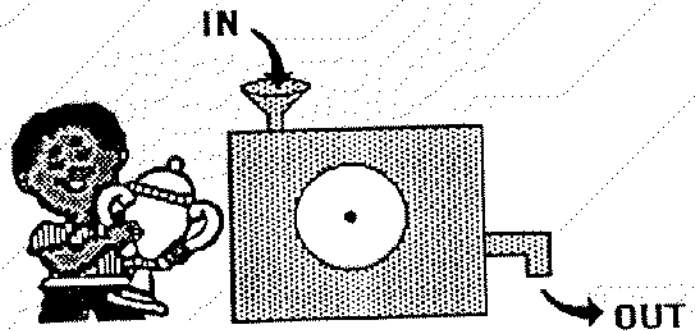
- ★★ 1. Draw a rectangle. Make it 3 centimeters wide and 7 centimeters long. Start at the corner below.



- ★★ 2. An ant walked around the outside of your rectangle above. How many centimeters did it walk?

Answer: The ant walked \_\_\_\_\_ centimeters.

- ★★★ 3. Kareem won a prize for making a number machine. He puts a number into the machine. Another number comes out. The number that comes out depends on how the dial is set. Fill in the table. Show the numbers that come out, or go in. The setting is *subtract 7*:






In	Out
11	4
15	
19	
	20

- ★ 4. Richard has 3 dimes, a nickel, and 3 pennies. He buys a pencil for 26¢. Does he have enough left to buy an eraser for 10¢?

Answer: \_\_\_\_\_ (yes or no)


★★★ 5. How many more cups of milk than soda are there?

Soda	
Milk	

 stands for 2 cups.

Answer: \_\_\_\_\_ more cups of milk

★ 6. Sally has 4 red trucks. She also has 2 yellow trucks, 2 blue trucks, and 1 purple truck. How many trucks does Sally have in all?




Answer: \_\_\_\_\_ trucks

★★ 7. What time is soccer practice? Circle the right clock.

It is after 4 o'clock.

It is before 6 o'clock.

It is not 5 o'clock.


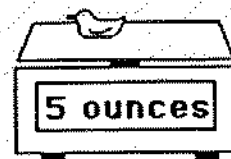


★★★ 8. There are 4 classrooms. 26 children are in each classroom. How many children in all 4 classrooms?



Answer: \_\_\_\_\_ children

★★ 9. How much does the piece of cake weigh by itself?



Answer: \_\_\_\_\_ ounces